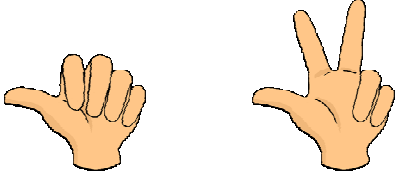


## Calcul

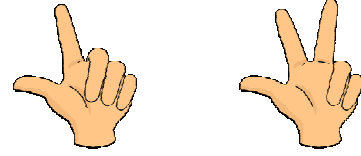
Addition de deux nombres en ligne. Somme  $\leq 5$ 

0 1 2 3 4 5 6 7 8 9

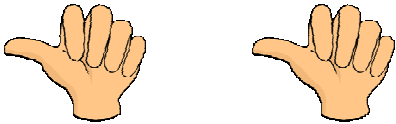
Compléter les écritures additives.




$$\boxed{\dots} + \boxed{\dots} = \boxed{\dots}$$




$$\boxed{\dots} + \boxed{\dots} = \boxed{\dots}$$




$$\boxed{\dots} + \boxed{\dots} = \boxed{\dots}$$



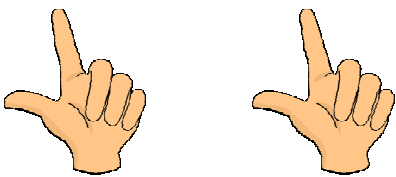
$$\boxed{\dots} + \boxed{\dots} = \boxed{\dots}$$




$$\boxed{\dots} + \boxed{\dots} = \boxed{\dots}$$



$$\boxed{\dots} + \boxed{\dots} = \boxed{\dots}$$



$$\boxed{\dots} + \boxed{\dots} = \boxed{\dots}$$



$$\boxed{\dots} + \boxed{\dots} = \boxed{\dots}$$